











sample

家庭学習プリント

「計数」

上の絵の数を数えて、その数だけ下の四角の中に○をかきましょう。

| | | | | | | | | | | | | | | | | | | | | | | | | | | | | | | | | | | | | | | | | | | | | | | | | | | | | | | |
|--|--|---|--|--|--|--|--|--|--|--|--|--|--|--|--|--|--|--|--|--|--|--|--|--|--|--|--|--|--|--|--|--|--|--|--|--|--|--|--|--|--|--|--|--|--|--|--|--|--|--|--|--|--|--|
|  |  |  |  |  | | | | | | | | | | | | | | | | | | | | | | | | | | | | | | | | | | | | | | | | | | | | | | | | | | |
| <table border="1"><tr><td></td><td></td><td></td><td></td><td></td></tr><tr><td></td><td></td><td></td><td></td><td></td></tr></table> | | | | | | | | | | | <table border="1"><tr><td></td><td></td><td></td><td></td><td></td></tr><tr><td></td><td></td><td></td><td></td><td></td></tr></table> | | | | | | | | | | | <table border="1"><tr><td></td><td></td><td></td><td></td><td></td></tr><tr><td></td><td></td><td></td><td></td><td></td></tr></table> | | | | | | | | | | | <table border="1"><tr><td></td><td></td><td></td><td></td><td></td></tr><tr><td></td><td></td><td></td><td></td><td></td></tr></table> | | | | | | | | | | | <table border="1"><tr><td></td><td></td><td></td><td></td><td></td></tr><tr><td></td><td></td><td></td><td></td><td></td></tr></table> | | | | | | | | | | |
| | | | | | | | | | | | | | | | | | | | | | | | | | | | | | | | | | | | | | | | | | | | | | | | | | | | | | | |
| | | | | | | | | | | | | | | | | | | | | | | | | | | | | | | | | | | | | | | | | | | | | | | | | | | | | | | |
| | | | | | | | | | | | | | | | | | | | | | | | | | | | | | | | | | | | | | | | | | | | | | | | | | | | | | | |
| | | | | | | | | | | | | | | | | | | | | | | | | | | | | | | | | | | | | | | | | | | | | | | | | | | | | | | |
| | | | | | | | | | | | | | | | | | | | | | | | | | | | | | | | | | | | | | | | | | | | | | | | | | | | | | | |
| | | | | | | | | | | | | | | | | | | | | | | | | | | | | | | | | | | | | | | | | | | | | | | | | | | | | | | |
| | | | | | | | | | | | | | | | | | | | | | | | | | | | | | | | | | | | | | | | | | | | | | | | | | | | | | | |
| | | | | | | | | | | | | | | | | | | | | | | | | | | | | | | | | | | | | | | | | | | | | | | | | | | | | | | |
| | | | | | | | | | | | | | | | | | | | | | | | | | | | | | | | | | | | | | | | | | | | | | | | | | | | | | | |
| | | | | | | | | | | | | | | | | | | | | | | | | | | | | | | | | | | | | | | | | | | | | | | | | | | | | | | |
|  |  |  |  |  | | | | | | | | | | | | | | | | | | | | | | | | | | | | | | | | | | | | | | | | | | | | | | | | | | |
| <table border="1"><tr><td></td><td></td><td></td><td></td><td></td></tr><tr><td></td><td></td><td></td><td></td><td></td></tr></table> | | | | | | | | | | | <table border="1"><tr><td></td><td></td><td></td><td></td><td></td></tr><tr><td></td><td></td><td></td><td></td><td></td></tr></table> | | | | | | | | | | | <table border="1"><tr><td></td><td></td><td></td><td></td><td></td></tr><tr><td></td><td></td><td></td><td></td><td></td></tr></table> | | | | | | | | | | | <table border="1"><tr><td></td><td></td><td></td><td></td><td></td></tr><tr><td></td><td></td><td></td><td></td><td></td></tr></table> | | | | | | | | | | | <table border="1"><tr><td></td><td></td><td></td><td></td><td></td></tr><tr><td></td><td></td><td></td><td></td><td></td></tr></table> | | | | | | | | | | |
| | | | | | | | | | | | | | | | | | | | | | | | | | | | | | | | | | | | | | | | | | | | | | | | | | | | | | | |
| | | | | | | | | | | | | | | | | | | | | | | | | | | | | | | | | | | | | | | | | | | | | | | | | | | | | | | |
| | | | | | | | | | | | | | | | | | | | | | | | | | | | | | | | | | | | | | | | | | | | | | | | | | | | | | | |
| | | | | | | | | | | | | | | | | | | | | | | | | | | | | | | | | | | | | | | | | | | | | | | | | | | | | | | |
| | | | | | | | | | | | | | | | | | | | | | | | | | | | | | | | | | | | | | | | | | | | | | | | | | | | | | | |
| | | | | | | | | | | | | | | | | | | | | | | | | | | | | | | | | | | | | | | | | | | | | | | | | | | | | | | |
| | | | | | | | | | | | | | | | | | | | | | | | | | | | | | | | | | | | | | | | | | | | | | | | | | | | | | | |
| | | | | | | | | | | | | | | | | | | | | | | | | | | | | | | | | | | | | | | | | | | | | | | | | | | | | | | |
| | | | | | | | | | | | | | | | | | | | | | | | | | | | | | | | | | | | | | | | | | | | | | | | | | | | | | | |
| | | | | | | | | | | | | | | | | | | | | | | | | | | | | | | | | | | | | | | | | | | | | | | | | | | | | | | |

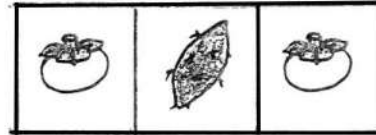




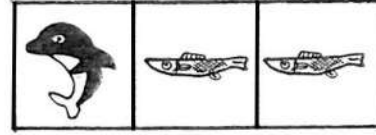









数の比較 (C)

・左の口の中にあるものが、左から多い順に並んでいる絵を右から見つけて赤のクーピーで○をつけましょう。

| | | | | | | | | | | |
|---|---|---|---|---|---|---|---|---|---|---|
| | <table border="1"> <tbody> <tr> <td data-bbox="1433 223 1601 375">♥</td> <td data-bbox="1680 223 1848 375">○</td> <td data-bbox="1870 223 2049 375">□</td> </tr> <tr> <td data-bbox="1433 406 1601 558">○</td> <td data-bbox="1680 406 1848 558">□</td> <td data-bbox="1870 406 2049 558">♥</td> </tr> <tr> <td data-bbox="1433 590 1601 742">□</td> <td data-bbox="1680 590 1848 742">♥</td> <td data-bbox="1870 590 2049 742">○</td> </tr> </tbody> </table> | ♥ | ○ | □ | ○ | □ | ♥ | □ | ♥ | ○ |
| ♥ | ○ | □ | | | | | | | | |
| ○ | □ | ♥ | | | | | | | | |
| □ | ♥ | ○ | | | | | | | | |
| | <table border="1"> <tbody> <tr> <td data-bbox="1433 869 1601 1021">♂</td> <td data-bbox="1668 869 1836 1021">♀</td> <td data-bbox="1881 869 2049 1021">♂</td> </tr> <tr> <td data-bbox="1433 1053 1601 1204">♂</td> <td data-bbox="1691 1053 1859 1204">♂</td> <td data-bbox="1881 1053 2049 1204">♀</td> </tr> <tr> <td data-bbox="1433 1236 1601 1388">♀</td> <td data-bbox="1691 1236 1859 1388">♂</td> <td data-bbox="1881 1236 2049 1388">♂</td> </tr> </tbody> </table> | ♂ | ♀ | ♂ | ♂ | ♂ | ♀ | ♀ | ♂ | ♂ |
| ♂ | ♀ | ♂ | | | | | | | | |
| ♂ | ♂ | ♀ | | | | | | | | |
| ♀ | ♂ | ♂ | | | | | | | | |

系列(B)

- ・ このように順番に並んでいる時、空いているところにはどれが入りますか。
すぐ下にある組み合わせの中から見つけて、○のところに入るものには○、△のところに入るものには△をかきましょう。



比較(量)

・それぞれビー玉を入れた時、水が1番上まであがるのはどの入れ物でしょう、×をつけましょう。

・スプーンのお砂糖を入れた時、それぞれ1番甘くなるのはどれですか、○をつけましょう。

| | |
|--|--|
| | |
| | |
| | |

三者比較 (速さ・強さ・高さ)

・ 3人の子供がジャンケンをしました。下の子供を強かった順に旗の1・2・3と線で結びましょう。

・ 3匹の動物が絵のように相撲をしました。それぞれの動物を強かった順に下の旗の1・2・3と線で結びましょう。

・ 3匹の動物がかけっこをしました。それぞれの動物を強かった順に下の旗の1・2・3と線で結びましょう。

・ 2枚の写真があります。この写真を見て1番背の高い子供に○、1番背の低い子供に×をつけましょう。